

## I Can Count My Money


---

### Directions:


Count the coins on the following page to add up their values.




A penny equals 1¢. Count by 1s to find the values of the pennies.



A nickel equals 5¢. Count by 5s to find the values of the nickels.



A dime equals 10¢. Count by 10s to find the values of the dimes.

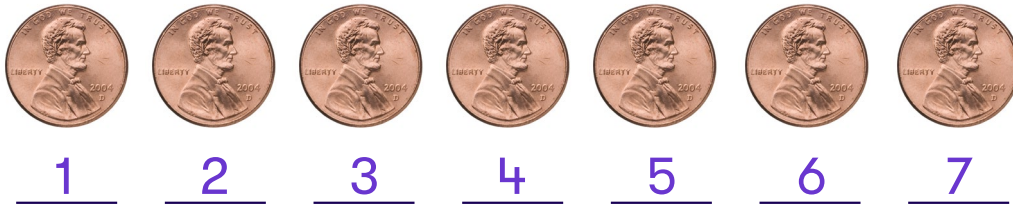


A quarter equals 25¢. Circle \$1.00 (4 quarters). How many are left? What are they worth?



# Answer key

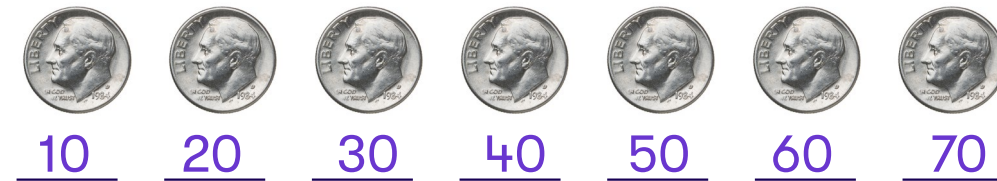
A penny equals 1¢. Count by 1s to find the values of the pennies.



A nickel equals 5¢. Count by 5s to find the values of the nickels.



A dime equals 10¢. Count by 10s to find the values of the dimes.



A quarter equals 25¢. Circle \$1.00 (4 quarters). How many are left? What are they worth?

